

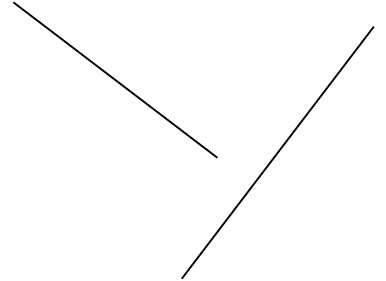
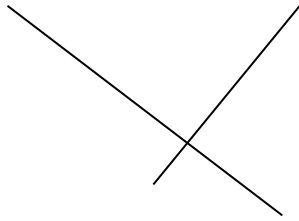
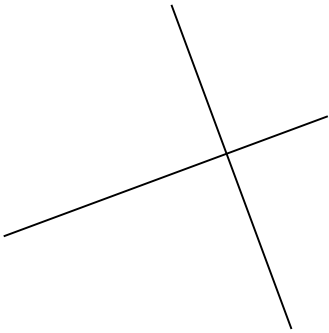
平行與垂直

姓名：_____

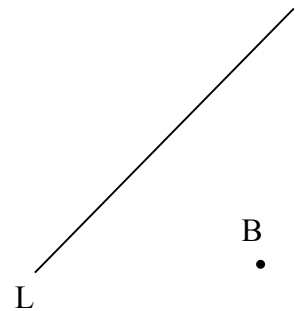
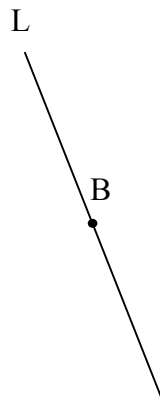

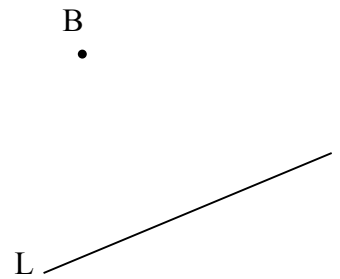
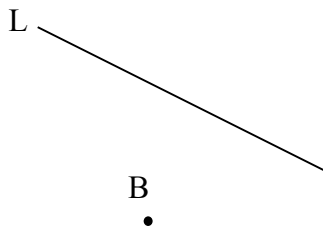
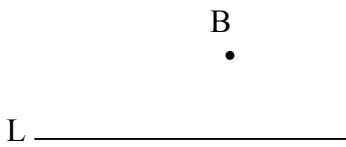
班別：_____()

日期：_____

1. 試用三角尺判斷以下哪對是垂直線。



2. 試用三角尺畫出一條穿過點 B 且與直線 L 互相垂直的直線。



3. 試用三角尺畫出一條穿過點 A 且與直線 L 互相平行的直線。

